


CAN YOU SPOT **10** DIFFERENCES?



Spell it Out!

f r i a g e s



Open Daily 8am-7pm
262-652-7728



On the Corner of:
60th Street (Hwy K) &
Green Bay Road (Hwy 31)

We have Perennials, Annuals,
Topsoil, and Produce.


Thank you for Shopping Local.
Jerry Smith Farm



FIND TWO
IDENTICAL
PICTURES



be a-maz-ing!



FILL IN THE BLANKS WITH THE WORDS:

ADD	BRAIN	PITCH	VIDEO
AFT	BROOM	SHEEP	WEIRD
EBB	FETCH	SHOES	WRITE
ICE	GRAPE	SPEED	ZEBRA
	GREEN	STEEL	
	MODEM	TRAIN	



$$2 \text{ roses} = 6$$

$$2 \text{ purple flowers} - 1 \text{ rose} = 1$$




$$2 \text{ yellow flowers} - 1 \text{ purple flower} = 20$$

$$1 \text{ rose} + 1 \text{ purple flower} + 1 \text{ yellow flower} = \square$$

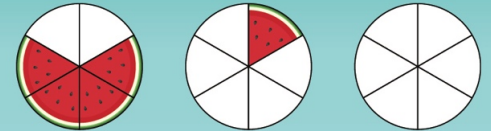
$$1 \text{ rose} = \square \quad 1 \text{ purple flower} = \square \quad 1 \text{ yellow flower} = \square$$




If you had a pet pig.
What would you name it?




FUN WITH FRACTIONS!



$$\frac{4}{6} + \frac{1}{6} = \frac{\quad}{\quad}$$



$$\frac{3}{6} + \frac{2}{6} = \frac{\quad}{\quad}$$



$$\frac{1}{6} + \frac{3}{6} = \frac{\quad}{\quad}$$

Q. What has to be broken before you can use it?

A. An egg

FIND
7
DIFFERENCES

